

Annual Examinations April – 2011

SET - II

Class: VIII

Subject: Social Studies

Total Marks: 100 Rool Number..... Time: 2 ½ Hrs

Time: 0.30 Hrs

Part – B

Marks:30

1. Conceptual Understanding:

15 Marks

A). Choose the correct answer and, write it in the bracket (5x1=5)

1. The nearest planet from the Sun ()
A). Earth B). Mercury
C). Saturn D). Venus
2. The type of soil that retains water for a longer period. ()
A) Swami Vivekanand B). Dayananda Swami
C) Veerashalingam D) Vidya Sagar
3. Arya Samaj is founded by
A) Swami Vivekanand B) Dayananda Swami
C) Veereshalingam D) Vidya Sagar
4. The type of Govt. in Inda. ()
A) Military Government B) Presidential
C) Para Military Government D) Monarchy
5. This is a free good ()
A) Radio B) Railway Journey
C) Scooter D) Air

2. Fill in the blanks

(5x1=5)

1. Goods of scarcity means _____
2. Bringing the productive goods under the control of government is called _____
3. Cultural Renaissances means _____
4. Vishakapatnam is _____ shipyard
5. _____ is prepared from Bauxite

3. Match the following

(5x1=5)




- | | | |
|----------------------------|--------|---------------------|
| A | | B |
| 1. Kolleru Lake | () | A) The Godavari |
| 2. Pulicat lake | () | B) River Krishna |
| 3. Dawaleshwaram Project | () | C) Fresh Water Take |
| 4. Nagarjuna Sagar Project | () | D) Manjeera Project |
| 5. Nizam Sagar Project | () | E) Salt Lake |

of Andhra Pradesh

II Communication Skills

(5x1=5)

Observe the following table :

S. No	Item	Symbol
1	Church	✚
2	Temple	
3	Tank	
4	Well	○
5	River	
6	Kaccha Road	- - - - -

- Indicates _____
- The following item is not given in the table ()
(A) Well B) River C) Fort D) Lake
- Indicates
(A) River B) Well C) Church D) Black tap Road
- Where do we use the symbols given in the table?
A) River B) Well C) Church D) Tar Road
- _____ indicates

