

Class: VI

Subject: Social Studies

Total Marks: 100 Rool Number..... Time: 2 ½ Hrs

Time: 0.30 Hrs

Part – B

Marks:30

1. Conceptual Understanding:

1. Choose the correct answer and, write it in the bracket (5x1=5)

1. The Rocky layer on Earth's crust is ()
A). Lithosphere B). Atmosphere
C). Biosphere D). Hydrosphere
2. The water bodies which separate continents are ()
A) Oceans B). Lakes C) Rivers D) Waterfalls
3. The following is a book of epic.
A) Ramayana B) Thripitikas C) Thirratnas D) Vedas
4. The first school of a child ()
A) Family B) Society C) Caste D) Religion
5. Which is not a factor of production?
A) Land B) Labour C) Car D) Capital

2. Fill in the blanks (5x1=5)

1. Tundra means _____
2. Normadic People belong to _____
3. Dasarajna war is _____
4. 'Arogya Sri' means _____
5. Machinery Tools are the example of _____ good.

3. Match the following (5x1=5)

- | A | | B |
|--------------------------|-----|-------------------------|
| 1. Capital of Kushans | () | A) Charaka |
| 2. Daviputra | () | B) Sculputre of Kushans |
| 3. Charaka Samhitha | () | C) Kamishka |
| 4. Soundarya Nandam | () | D) Purushapuram |
| 5. Sculpture of Gandhara | () | E) Ashwa Gosha |

III Information Skills

(5x1=5)

Read the given information and answer the questions in one or two words.

1. Secondary Landforms

Mountains	Above 800 Mts
Plateaus	Flat Surface with up & and downs
Ocean bed	Floor of an Ocean

Q). How do you call the land form of below the height of 800 mts?

A)

2. Countries of Asian continent – Extent

Country	M.Sq. Kms
India	3.28
China	9.50
Thailand	0.51

Q) How many times is china more than India in area ?.

A)

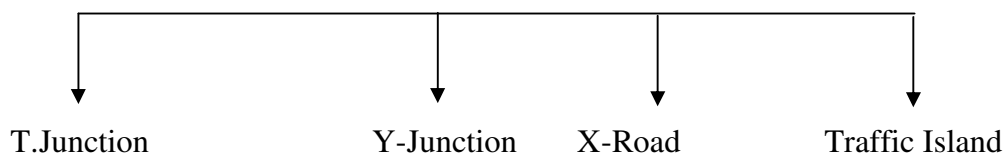
3. Rule of Gupta kings

King	Period Rule
Chandra Gupta – I	320 AD – 330 A.D
Chandra Gupta – II	375 A.D – A.D.415
Harsha Vardhana	606 A.D. -647 A.D

Q) Which Gupta king ruled for more period?

A)

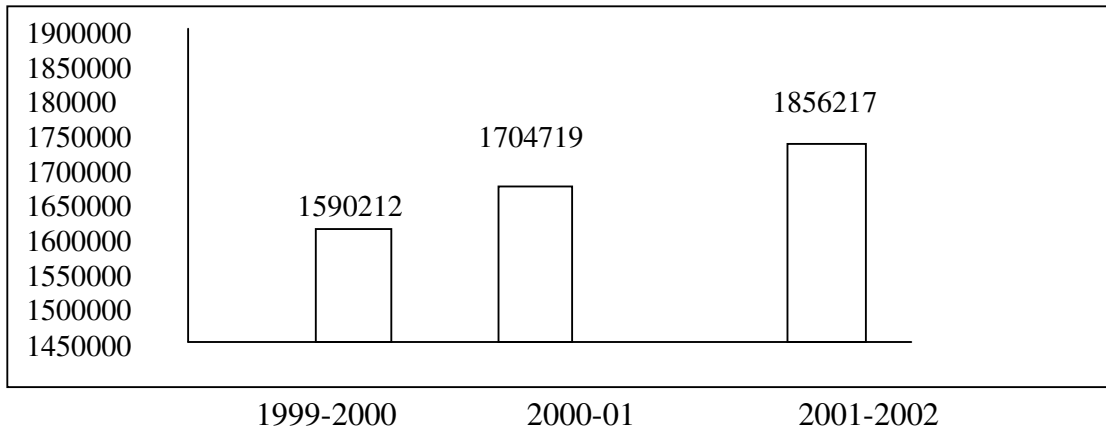
4. Types of Road Junctions



Q) At which Junction do the roads join perpendicularly?

5. Net National Product.

A).



Q) In which year is the Net National product year less?

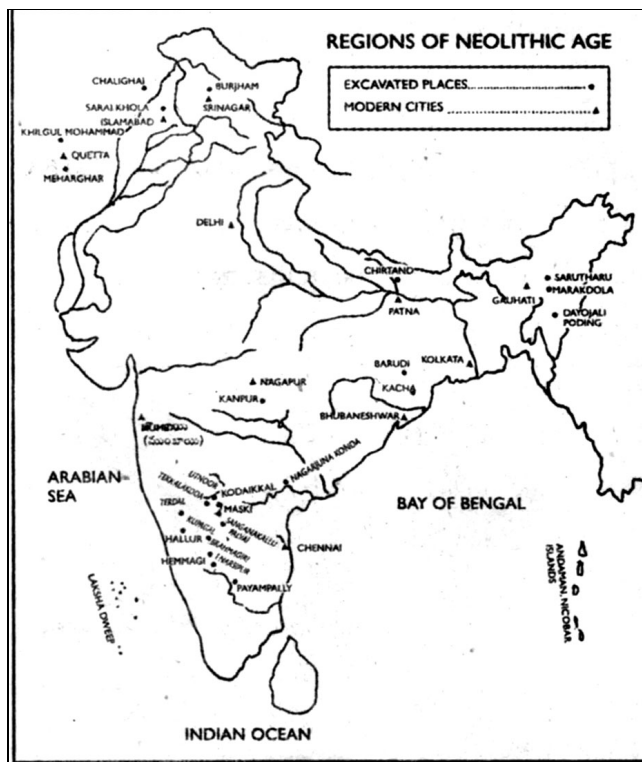
A)

III. Mapping Skills

(5x1=5)

(i) Map Reading

Observe the map carefully and answer the questions given.



1. write the names of modern cities in the above gives map.
A)
2. The sea at the Southern side of India is?
A)
3. The places of Neolithic age are
A)
4. What does the symbol 'A' indicate?
A)
5. The sea at the western side of India is
A)

IV. Responding on social issues

(5x1=5)

1. The reason to find out fire by man
A) Migration from on place to another place
B) To Cook food
C) For hunting
D) For Agriculture
2. To become a happy family ()
A) Should make a big family
B) Should have a small family
C) Should have more number of males in the family.
D) Should give complete freedom to all family, members.
3. Which of the following is a social evil? ()
A) Living together
B) Dowry system
C) Respecting elders
D) To be disciplined
4. If we damage the Government property ()
A) Government will be changed
B) The people will be more discomforted
C) Government will bear the loss
D) Politicians may get frightened
5. Which of the following is a traffic rule?
A) Driving vehicle speedily
B) Travelling
C) Crossing the road at Zebra crossing
D) Driving the vehicle by speaking over cell phone.
